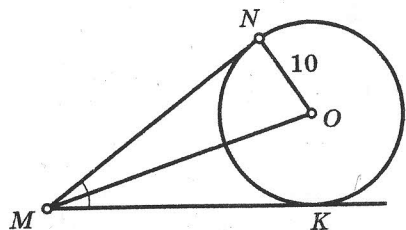


ЧЕТЫРЕ ЗАМЕЧАТЕЛЬНЫЕ ТОЧКИ ТРЕУГОЛЬНИКА

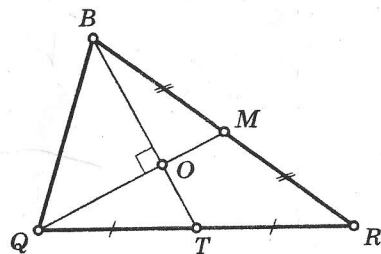
Таблица 22

Окончание табл. 22

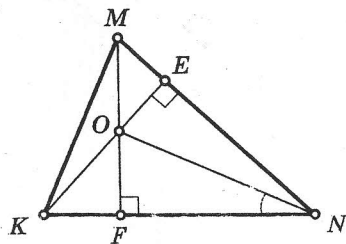
1 $\angle NMK = 60^\circ$, MO — ?



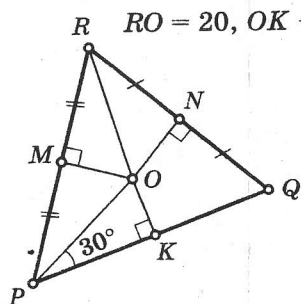
5 $QM = 9$, $BT = 12$, $S_{\Delta BOQ}$ — ?



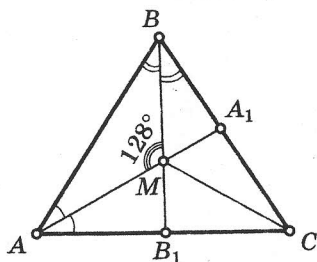
2 $\angle MKN = 66^\circ$, $\angle FNO$ — ?



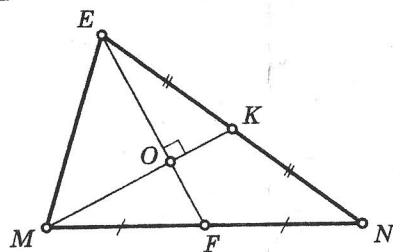
6 $RO = 20$, OK — ?



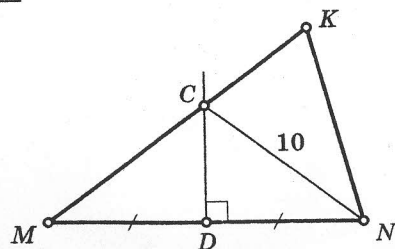
3 $\angle MCB_1$ — ?



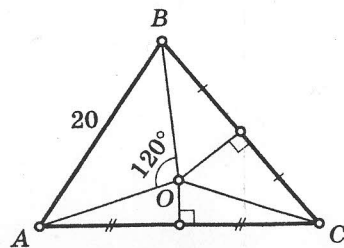
7 $EF = 18$, $MK = 15$, ON — ?



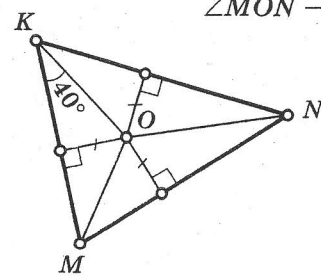
4 $MK = 17$, CK — ?



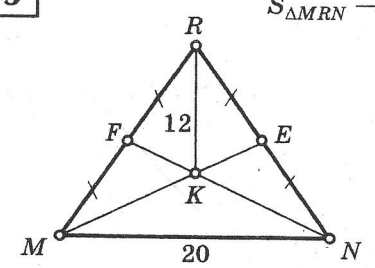
8 OC — ?



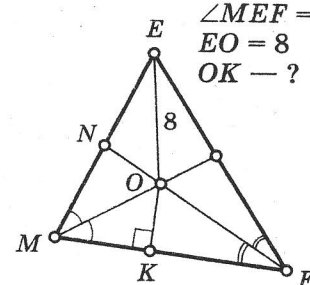
9 $\angle MON$ — ?



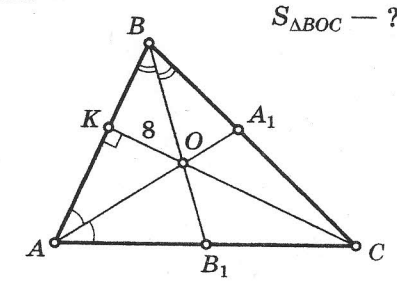
13 $S_{\Delta MRN}$ — ?



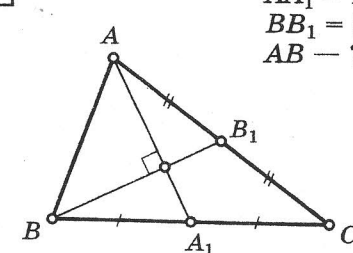
10 $\angle MEF = 60^\circ$, $EO = 8$, OK — ?



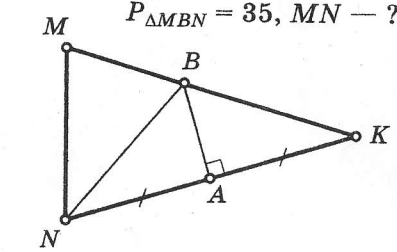
14 $BC = 20$, $S_{\Delta BOC}$ — ?



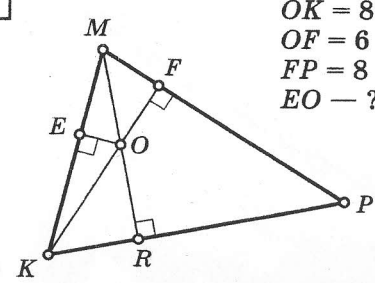
11 $AA_1 = 12$, $BB_1 = 9$, AB — ?



15 $MK = NK = 20$, $P_{\Delta MBN} = 35$, MN — ?



12 $OK = 8$, $OF = 6$, $FP = 8$, EO — ?



16 $S_{\Delta OBC}$ — ?

